

# Rules Quiz!!


## Sailing Rules Quiz #1:

Circle The Correct

1. Which boat has the right of way?

A or B

Wind  
→



2. At a starting line with 30 seconds to go, boats A, B, and C are in a good position on the line. Boat D come flying in and tries to fit in between A and B. Boat D crashes into A and B.

Whos at fault?


Boat A

Boat B

Boat C

Boat D

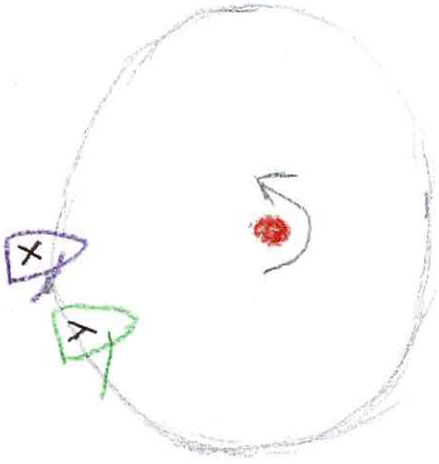
wind  
→



## Rules Quiz!!

3. Boats X and Y are sailing downwind towards the Leeward Mark.

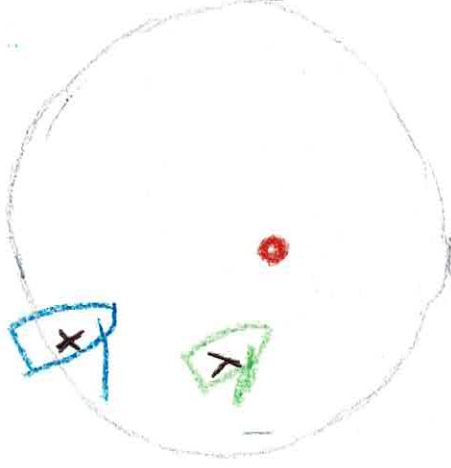
### Scenario A.



In Scenario A, does Y have to give room for X to round the mark?

**Yes**      **No**

### Scenario B.



In Scenario B, does Y have to give X room to round the mark?

**Yes**      **No**

4. Rob and Peter are sailing towards the channel in Duxbury Bay. They see a large Grady White motor boat turning the corner up ahead. Should they
- A. Keep sailing their path since they are in a sailboat
  - B. Turn around and sail the other direction away from their coach
  - C. Luff their sails before they enter the channel, wait for the boat to pass then sail on
  - D. Try and sail faster to get across the channel before the motorboat catches up

## Rules Quiz!!

5. Which boat has the right of way?

**A or B**

